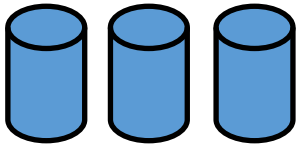
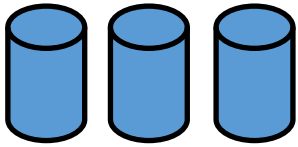


Thursday 9th July 2020

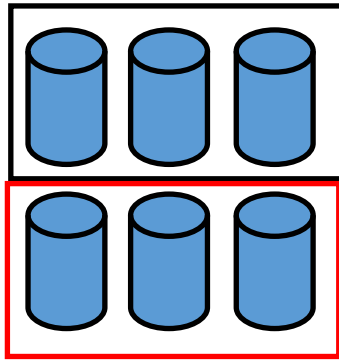
Multiplication and Division

Example



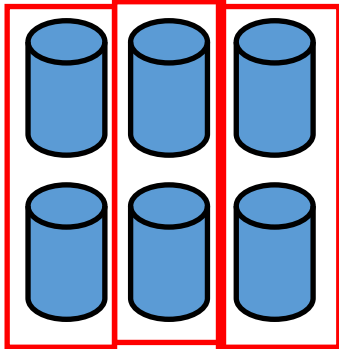
6 cans in total.

2 groups of
3 cans
 $2 \times 3 = 6$



6 cans
shared
into 2
groups of 3
 $6 \div 2 = 3.$

3 groups of
2 cans
 $3 \times 2 = 6$

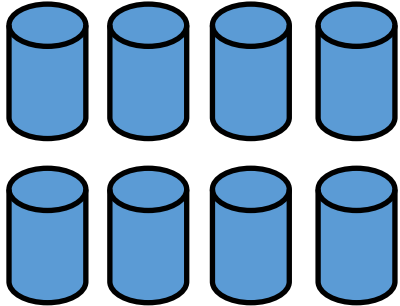


6 cans
shared
into 3
groups of 2
 $6 \div 3 = 2.$

Thursday 9th July 2020

Multiplication and Division

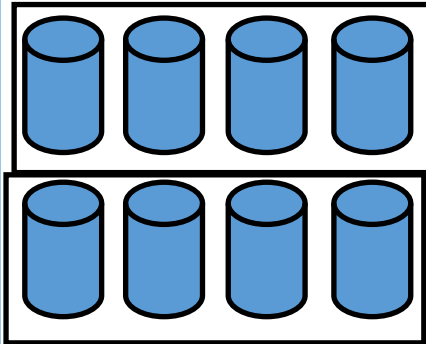
Can you complete the calculations?



8 cans in total.

2 groups of
4 cans

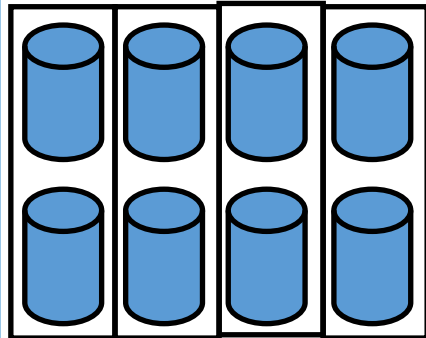
$$_ _ \times _ _ = _ _$$



8 cans
shared
into 2
groups of 4
 $_ _ \div _ _ = _ _ .$

4 groups of
2 cans

$$_ _ \times _ _ = _ _$$



8 cans
shared
into 4
groups of 2
 $_ _ \div _ _ = _ _ .$