



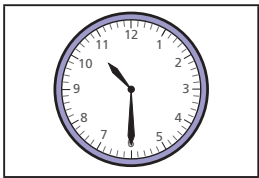
1 Match the clocks to the times.




half past 7



half past 10




half past 1

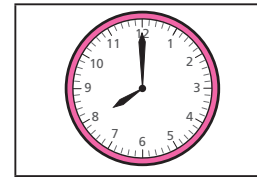


half past 4

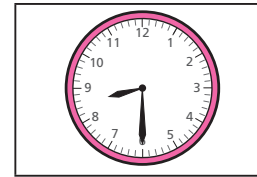
2 Match the clocks to the times.



8 o'clock




half past 8



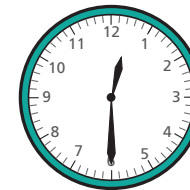
half past 3

3 Which time matches the clock?



6 o'clock

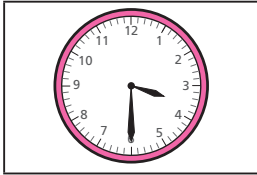
half past 6




6 o'clock

half past 12


2 Match the clocks to the times.



8 o'clock



half past 8



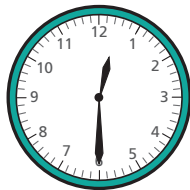
half past 3

3 Which time matches the clock?



6 o'clock

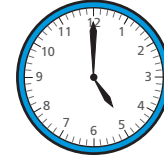
half past 6




6 o'clock

half past 12

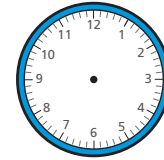
4 Complete the pattern.



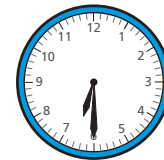
5 o'clock



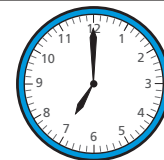
half past _____



6 o'clock



half past _____



_____ o'clock

What time comes next?

