


Count in steps of 2, 5 or 10 to answer the questions.  
Look carefully how many are in each group.

1 Complete the sentences.



There are 4 bags of apples.

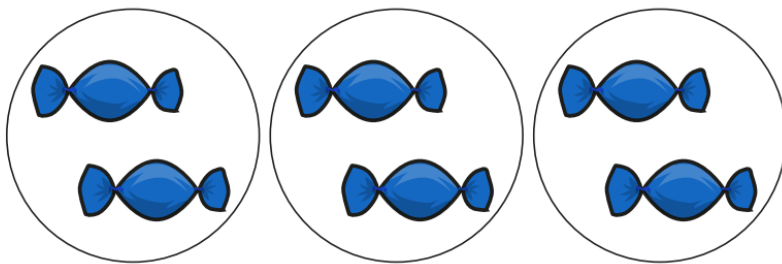
There are 5 apples in each bag.

4 equal groups of 5

5 + 5 + 5 + 5 =     

There are      apples altogether.

2 How many sweets are there?



There are      bags of sweets.

There are      sweets in each bag.

     equal groups of     

     +      +      =     

There are      sweets altogether.


3 How many marbles are there?



There are     boxes of marbles.  
There are     marbles in each bag.  
    equal groups of      
    +     +     =    

There are     marbles altogether.

4 How many candles are there?



There are     groups of candles.  
There are     candles in each group.  
    equal groups of      
    +     +     +     =    

There are     candle altogether.