



Wednesday 27th May 2020

Can you still tell the time?

It's time to go on holiday. Use the clocks to help plan the trip.



What time do you get up to go on holiday? _____




What time do you set off on holiday? _____



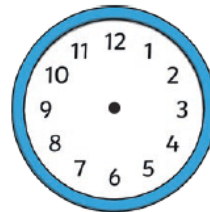
What time do you play on the beach? _____



What time do you each an ice cream? _____



At 4 o'clock, you go swimming. Draw the hands on the clock.



At half past 6, you go to a disco. Draw the hands on the clock.

If you go on holiday the day after Sunday, what day will you go on holiday? _____

If you go to the beach on the second day of your holiday, what day will you go to the beach? _____