

Year 1 Maths Activity Mat

①


Section 1

What's next?

10	20	30				
----	----	----	--	--	--	--

Section 2

Add 1 more flower.



There would be flowers altogether

Section 3

What's the missing number?

$$10 - \square = 6$$




Section 4

Which line is the longest?



Section 5

If Lisa has 6 apples and she shares them equally with Sarah, how many apples will they have each?



Section 6

Colour half of these shapes.



Section 7

Circle the odd numbers:

2 8 13
7 1 12

Section 8

Fill in the boxes:

$$18 + \square = 20$$

$$15 + \square = 20$$

Year 1 Maths Activity Mat: 1

Answers


Section 1

What's next?

10	20	30	40	50	60	70
----	----	----	----	----	----	----

Section 2

Add 1 more flower.



There would be flowers altogether

Section 3


What's the missing number?

$$10 - \boxed{4} = 6$$




Section 4

Which line is the longest?



Section 5

If Lisa has 6 apples and she shares them equally with Sarah, how many apples will they have each?



Section 6

Colour half of these shapes.



Section 7

Circle the odd numbers:

2 8
 12

Section 8

Fill in the boxes:

$$18 + \boxed{2} = 20$$

$$15 + \boxed{5} = 20$$