

Thursday 30th April 2020


Equal Groups- Reasoning

1- Amir and Whitney have been sharing 20 cubes into equal groups.


Who has made a mistake?



Amir



Whitney




Can you explain where she went wrong?

-----

-----

-----

2- Dora has 10 biscuits She wants to share them equally at her party.



How many people could be at her party?

Is there more than one possible answer?