

Thursday 23rd April 2020

## Equal Groups

1 Here are some socks.



a) Draw lines to match the pairs of socks.


b) Complete the sentences.

There are  socks altogether.

There are  socks in each pair.

There are  pairs of socks.

2 Here are some counters.



a) Circle groups of 2

b) Complete the sentences.

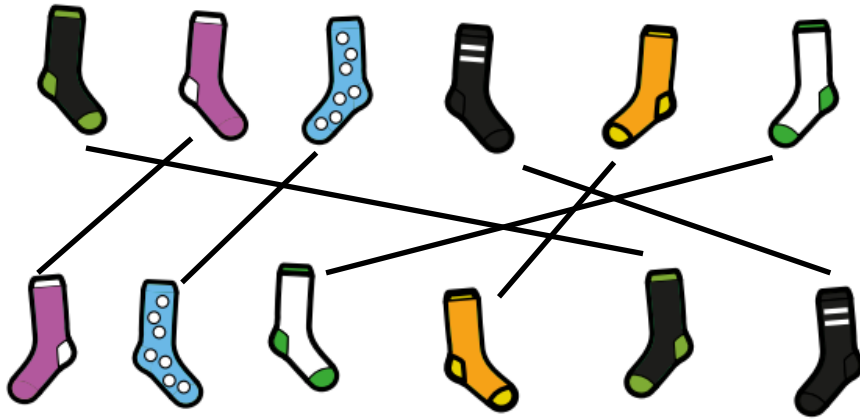
There are  counters altogether.

There are  equal groups of 2 counters.

Thursday 23rd April 2020

## Equal Groups

1 Here are some socks.



a) Draw lines to match the pairs of socks.

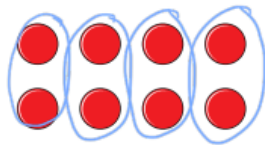
b) Complete the sentences.

There are  socks altogether.

There are  socks in each pair.

There are  pairs of socks.

2 Here are some counters.



a) Circle groups of 2

b) Complete the sentences.

There are  counters altogether.

There are  equal groups of 2 counters.