

Compare these numbers. Write the number shown by the representations then circle the correct sign.

Remember

> means greater than

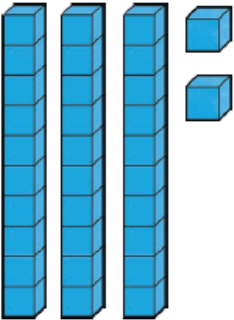
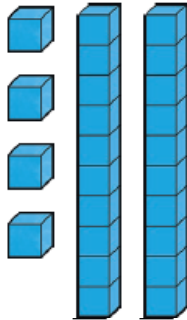
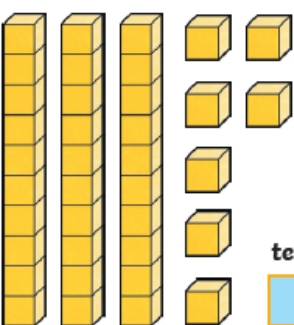
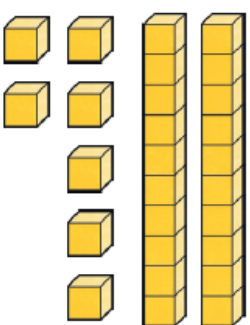
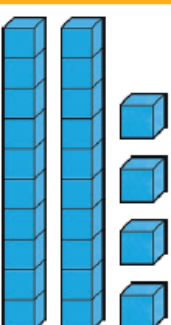
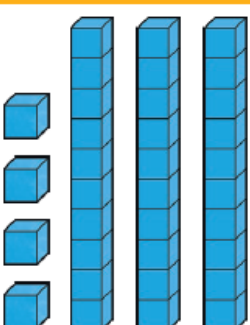
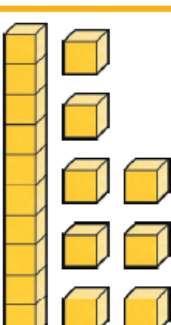
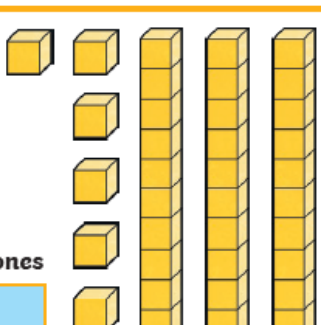
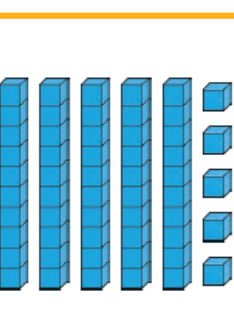
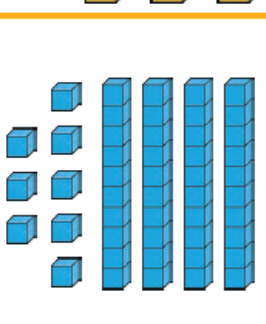
5 is greater than 3

$5 > 3$

< means less than

3 is less than 5

$3 < 5$

 <p>tens ones</p> <p><input type="text" value="3"/> <input type="text" value="2"/></p>	<p><input type="radio"/> &gt;   <input type="radio"/> &lt;   <input type="radio"/> =</p>	 <p>tens ones</p> <p><input type="text" value="2"/> <input type="text" value="4"/></p>
 <p>tens ones</p> <p><input type="text"/> <input type="text"/></p>	<p>&gt;   &lt;   =</p>	 <p>tens ones</p> <p><input type="text"/> <input type="text"/></p>
 <p>tens ones</p> <p><input type="text"/> <input type="text"/></p>	<p>&gt;   &lt;   =</p>	 <p>tens ones</p> <p><input type="text"/> <input type="text"/></p>
 <p>tens ones</p> <p><input type="text"/> <input type="text"/></p>	<p>&gt;   &lt;   =</p>	 <p>tens ones</p> <p><input type="text"/> <input type="text"/></p>
 <p>tens ones</p> <p><input type="text"/> <input type="text"/></p>	<p>&gt;   &lt;   =</p>	 <p>tens ones</p> <p><input type="text"/> <input type="text"/></p>